



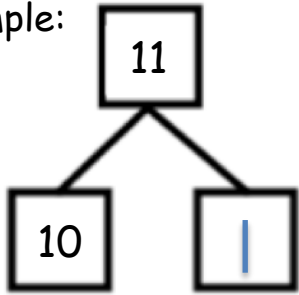
DUVAL COUNTY PUBLIC SCHOOLS

Name \_\_\_\_\_

Date \_\_\_\_\_

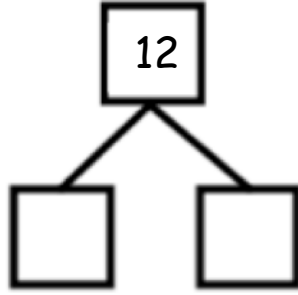
Model each number with cubes on your number bond mat. Then, complete the number sentences and number bonds.

Example:



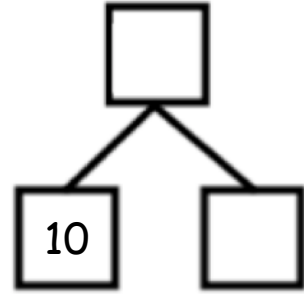
$11 = 10 + 1$

$10 + 1 = 11$



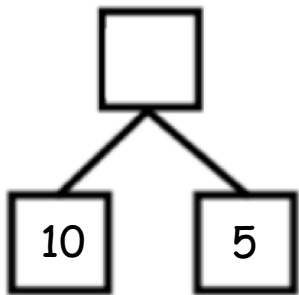
$12 = 10 + \underline{\quad}$

$10 + \underline{\quad} = 12$



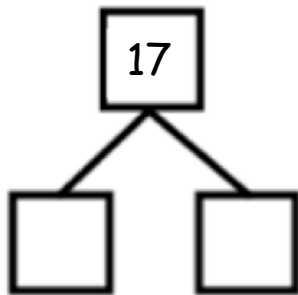
$13 = 10 + \underline{\quad}$

$10 + \underline{\quad} = 13$



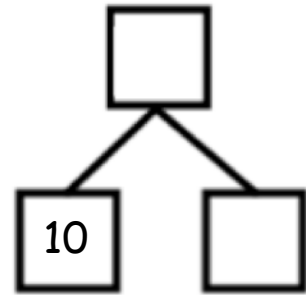
$\underline{\quad} + 5 = 15$

$15 = \underline{\quad} + 5$



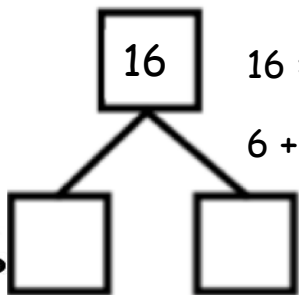
$\underline{\quad} + 7 = 17$

$17 = \underline{\quad} + 7$



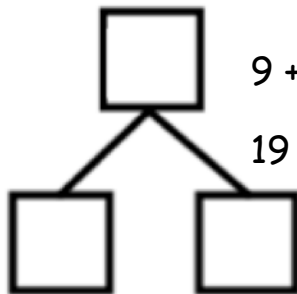

$\underline{\quad} + 8 = 18$

$18 = 10 + \underline{\quad}$



$16 = 6 + \underline{\quad}$

$6 + \underline{\quad} = 16$



$9 + \underline{\quad} = 19$

$19 = 10 + \underline{\quad}$

